










Name: \_\_\_\_\_

Date: \_\_\_\_\_

# Geography Map Grids

Map grids are used in Geography. They are made when a pattern of lines form squares. Map Grids are labeled using the letter then the number. Use the map grid to answer the questions below.

	A	B	C
1			
2			
3			

The cow is in square \_\_\_\_\_

The pig is in square \_\_\_\_\_

The horse is in square \_\_\_\_\_

The sheep is in square \_\_\_\_\_

In B1 there is a \_\_\_\_\_

In A3 there is a \_\_\_\_\_