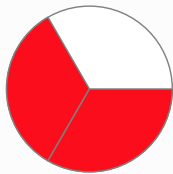


Name: _____

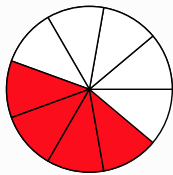
Date: _____

EQUIVALENT FRACTIONS

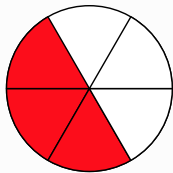
Draw a line between the matching fractions.



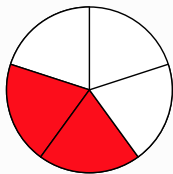
$2/5$



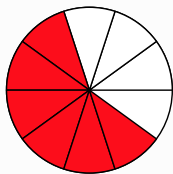
$3/5$



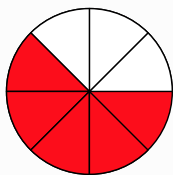
$5/8$



$4/9$



$2/3$



$1/2$