


Name:

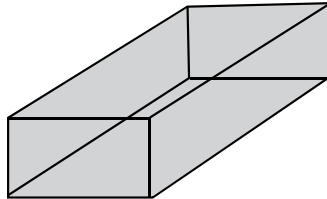
Date:

Answer it!

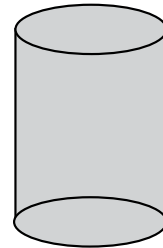
Look at the shapes given below and answer the questions below.



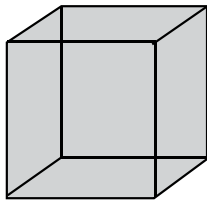
sphere



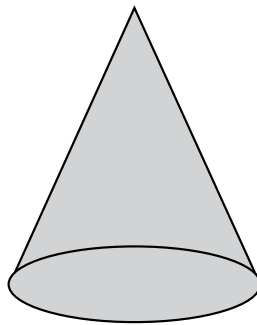
prism



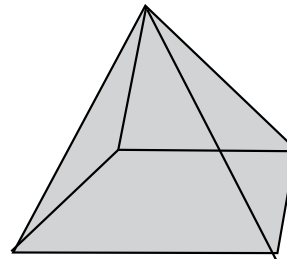
cylinder



cube



cone



pyramid

Shape	How many curved surfaces?	How many flat surfaces?
Sphere		
Cube		
Prism		
Cone		
Cylinder		
Pyramid		