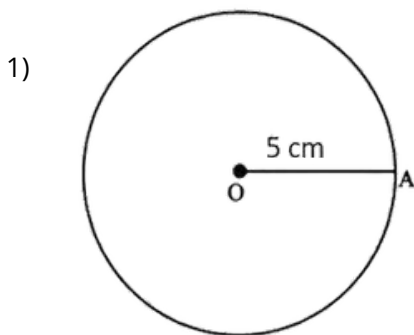


Name: .....

Date: .....

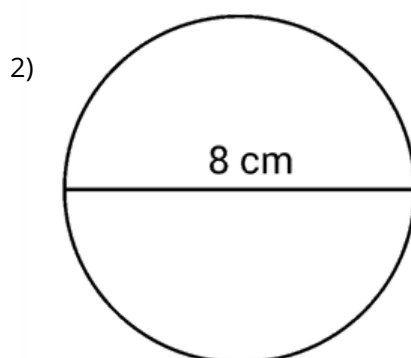
## Geometry: Radius and Diameter

What is the radius and diameter of each circle?



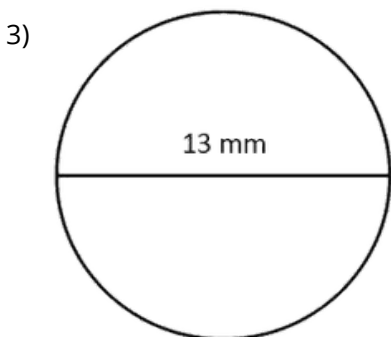
Radius = \_\_\_\_\_

Diameter = \_\_\_\_\_



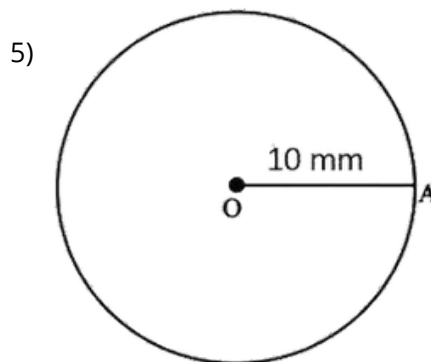
Radius = \_\_\_\_\_

Diameter = \_\_\_\_\_



Radius = \_\_\_\_\_

Diameter = \_\_\_\_\_



Radius = \_\_\_\_\_

Diameter = \_\_\_\_\_

Answer Key: 1) radius = 5 cm, Diameter = 10 mm  
2) radius = 4 cm, Diameter = 8 cm  
3) radius = 6.5 cm, Diameter = 13 mm  
4) radius = 5 mm, Diameter = 10 mm