







Name:

Date:

Geometry & Shapes : 3D shapes

Complete the table.

Shape	Name	No. of Faces	No. of Edges	No. of Vertices (Corners)
1 				
2 				
3 				
4 				
5 				
6 				

<p>Have you seen any of these shapes outside of the classroom?</p> <p>Draw two examples.</p>	1.	2.

Answer Key: 1 - rectangular prism, 6 faces, 12 edges, 8 vertices, 2 - cylinder, 2 flat, 1 curved, 2 edges, 0 vertices, 3 - triangular prism, 5 faces, 9 edges, 6 vertices, 4 - sphere, 1 curved, 0 edges, 0 vertices, 5 - cone, 1 flat, 1 curved, 1 edge, 1 vertex, 6 - square-based pyramid, 5 faces, 8 edges, 5 vertices