

Name:

Date:

It is a push or a pull or a squash?

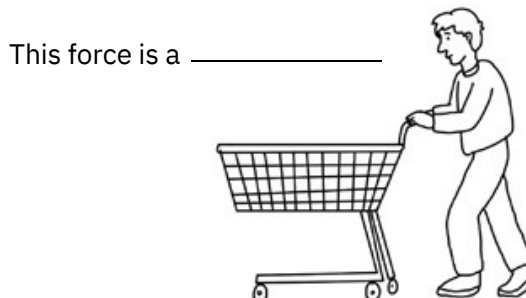
The pictures show a number of forces in action. Decide whether each force is a push, a pull or a squash. Write your answer beside each picture.




This force is a



This force is a




This force is a _____



This force is a _____



This force is a



This force is a _____

Can you push harder with your hand or your finger? Does a leg push harder than an arm? Who has the highest push force?

