









Name:

Date:

Everyday Math: Positions

Get help from an adult. Place a cross mark in the box near the image given in respective boxes based on the questions asked in the picture groups.

Which is at the bottom position?	Which is at the top position?
 <input data-bbox="659 676 779 819" type="checkbox"/>	 <input data-bbox="1279 676 1399 819" type="checkbox"/>
 <input data-bbox="659 951 779 1094" type="checkbox"/>	 <input data-bbox="1279 951 1399 1094" type="checkbox"/>
Which is at the top position?	Which is at the bottom position?
 <input data-bbox="659 1362 779 1505" type="checkbox"/>	 <input data-bbox="1279 1362 1399 1505" type="checkbox"/>
 <input data-bbox="659 1638 779 1780" type="checkbox"/>	 <input data-bbox="1279 1638 1399 1780" type="checkbox"/>