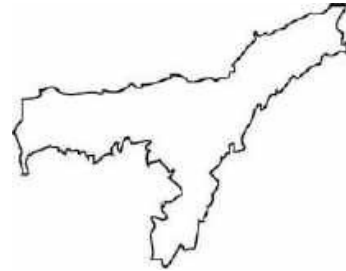
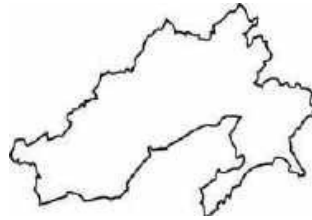
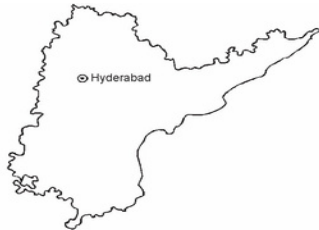


Name:

Date:

State Maps Of India

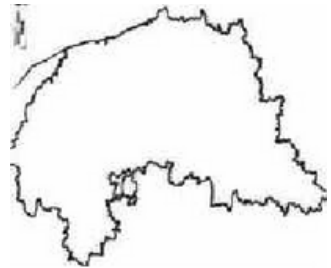
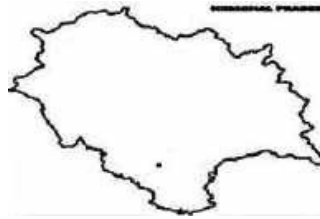
Some maps of Indian states are given below. Identify them and write their names.



.....

.....

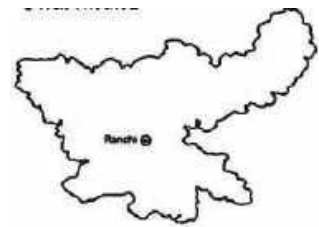
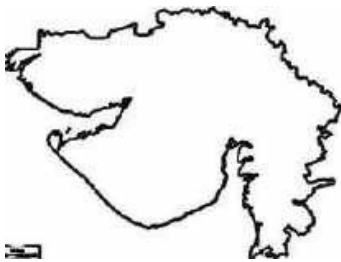
.....



.....

.....

.....



.....

.....

HINT

GUJARAT JHARKHAND ASSAM BIHAR HIMACHAL PRADESH

KARNATAKA ARUNACHAL PRADESH ANDHRA PRADESH