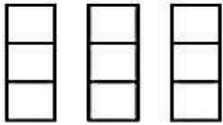
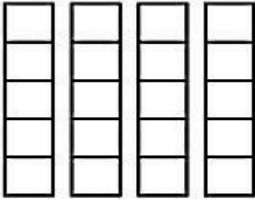
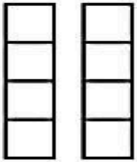
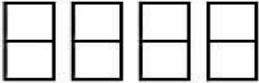


Name:

Date:

Number Sense: Count And Write

Count the grid in each box given below. Add and multiply separately and write the answers. One example has been given below for the reference.

	$3+3+3=$	$3 \times 3=$
	<hr/> <hr/>	<hr/> <hr/>
	<hr/> <hr/>	<hr/> <hr/>
	<hr/> <hr/>	<hr/> <hr/>

Answer Key: $1-3+3+3=9, 2-5+5+5+5=20, 3-4+4=8, 4-2+2+2=8$