

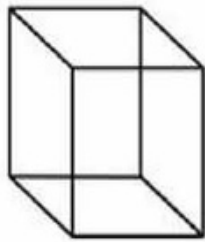
Name:

Date:

Shapes: 3D shapes

Write face, edges and vertices of given 3D shapes.

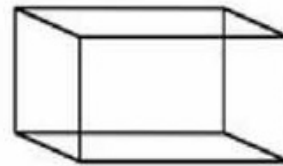
1)



CUBE

Faces _____
Edges _____
Vertices _____

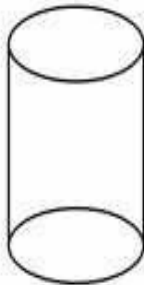
2)



Rectangular prism

Faces _____
Edges _____
Vertices _____

3)



Cylinder

Faces _____
Edges _____
Vertices _____

4)



Cone

Faces _____
Edges _____
Vertices _____

Answer key: 1) 6, 12, 8 2) 6, 12, 8 3) 3, 2, 0 4) 2, 1, 1